

# Pythagorean Theorem Video Lessons for Juan Perez: **WATCH ALL THREE VIDEOS AND TAKE NOTES!**

Video 1:

<https://www.youtube.com/watch?v=AA6RfgP-AHU>

Video 2:

<https://www.youtube.com/watch?v=nMhJLn5ives>

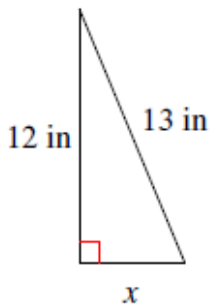
Video 3:

[https://www.youtube.com/watch?v=D\\_y\\_owf1Wsl](https://www.youtube.com/watch?v=D_y_owf1Wsl)

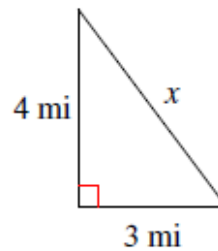
After you've watched all three videos complete the following problems: (SHOW ALL WORK)

**Find the missing side of each triangle. Round your answers to the nearest tenth if necessary.**

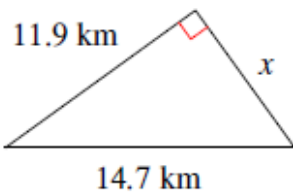
1)



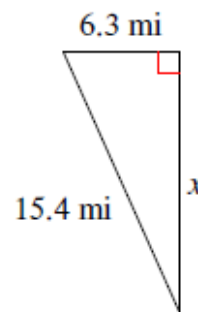
2)



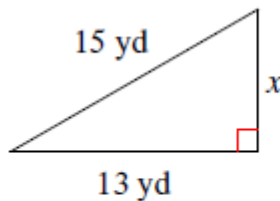
3)



4)



5)



6)

